

やり込んだお子さんのための

# 分野別毎日プリント



# Part 2

べんきょうは  
 まいにちコツコツ  
 あせらずコツコツ  
 ふくしゅうコツコツ  
 コツコツ  
 コツコツ  
 コツコツヤレバ  
 ダイジョウブ









なまえ

## おもさくらべ1

--	--	--	--	--	--	--	--	--	--	--	--	--	--	--	--	--	--	--	--	--



rainbow



rainbow


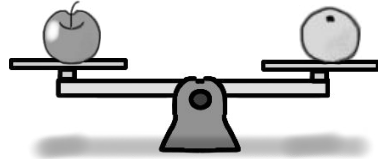
rainbow


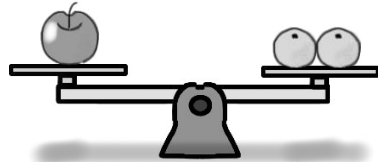
1番重いのは誰ですか。右の箱の中のお顔に○をつけましょう。


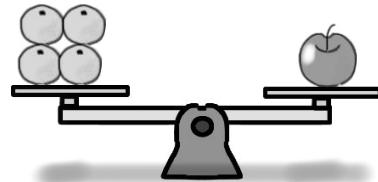


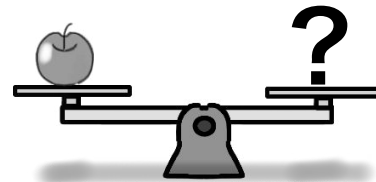

rainbow

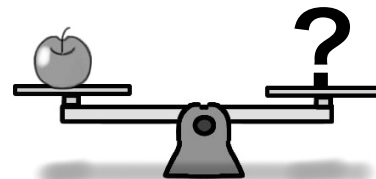
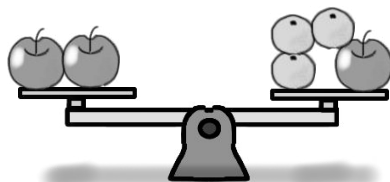
rainbow













rainbow

rainbow

左のシーソーはつりあっています。では右のシーソーのハテナマーク（クエッションマーク）のところにミカンは何個乗せるとつりあいますか。その数だけ箱の中に○をかきましょう。



rainbow



rainbow

rainbow

1番重いのは誰ですか。下の箱の中のお顔に○をつけます。1番軽いのは誰ですか。下の箱の中のお顔に△をつけます。



rainbow

rainbow

	<table border="1" data-bbox="1579 151 2116 359"> <tr><td></td><td></td><td></td><td></td><td></td></tr> <tr><td></td><td></td><td></td><td></td><td></td></tr> </table>										
	<table border="1" data-bbox="1579 422 2116 630"> <tr><td></td><td></td><td></td><td></td><td></td></tr> <tr><td></td><td></td><td></td><td></td><td></td></tr> </table>										
	<table border="1" data-bbox="1579 694 2116 901"> <tr><td></td><td></td><td></td><td></td><td></td></tr> <tr><td></td><td></td><td></td><td></td><td></td></tr> </table>										
	<table border="1" data-bbox="1579 965 2116 1173"> <tr><td></td><td></td><td></td><td></td><td></td></tr> <tr><td></td><td></td><td></td><td></td><td></td></tr> </table>										
	<table border="1" data-bbox="1579 1236 2116 1444"> <tr><td></td><td></td><td></td><td></td><td></td></tr> <tr><td></td><td></td><td></td><td></td><td></td></tr> </table>										































rainbow

rainbow

左の2つのシーソーはつりあっています。では右のシーソーのハテナマーク（クエッションマーク）のところにミカンは何個乗せるとつりあいますか。その数だけ箱の中に○をかきましょう。



rainbow

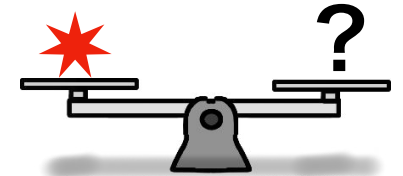
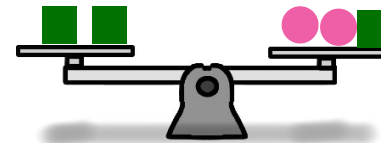
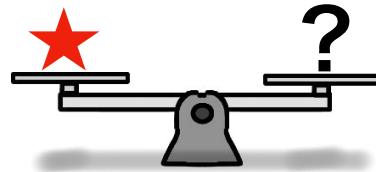
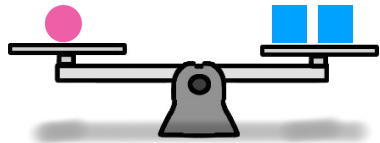

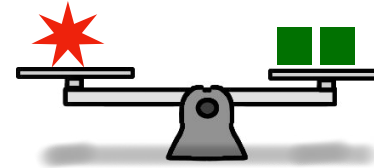
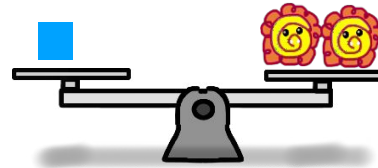
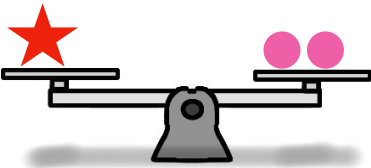
rainbow

rainbow

1番重いのは誰ですか。右の箱の中のお顔に○をつけましょう。1番軽いのは誰ですか。右の箱の中のお顔に△をつけましょう。



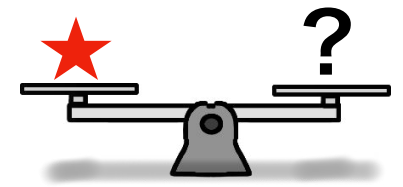
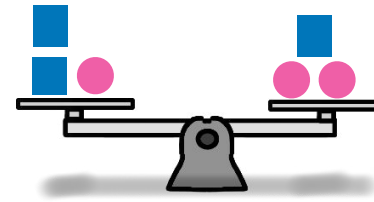
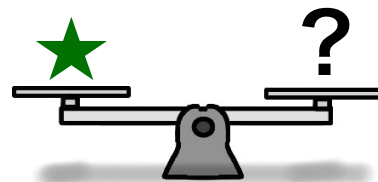
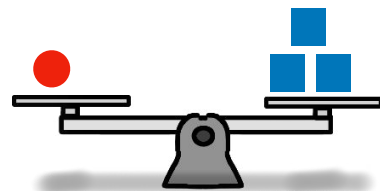

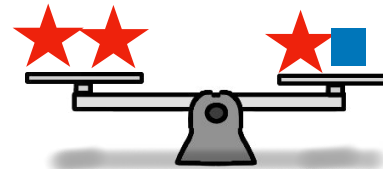
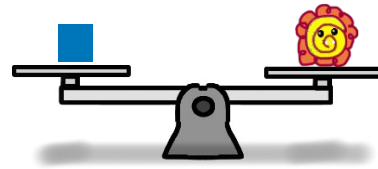
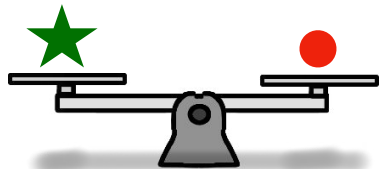
rainbow



--	--	--	--	--	--	--	--	--	--	--	--	--	--	--	--	--	--	--	--



--	--	--	--	--	--	--	--	--	--	--	--	--	--	--	--	--	--	--	--



--	--	--	--	--	--	--	--	--	--	--	--	--	--	--	--	--	--	--	--



--	--	--	--	--	--	--	--	--	--	--	--	--	--	--	--	--	--	--	--







rainbow

rainbow

ハテナマーク（クエッションマーク）のところに花マルは何個乗せるとつりあいますか。その数だけ下の箱の中に○をかきましょう。



rainbow



rainbow









rainbow

2番目に重いのは誰ですか。右の箱の中のお顔に○をつけましょう。1番軽いのは誰ですか。右の箱の中のお顔に△をつけましょう。





rainbow
















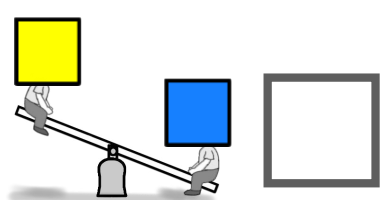
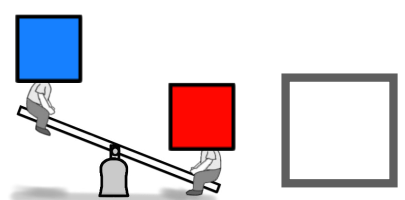




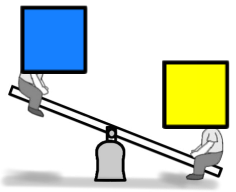
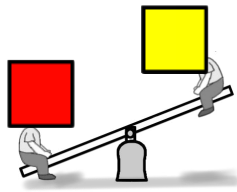

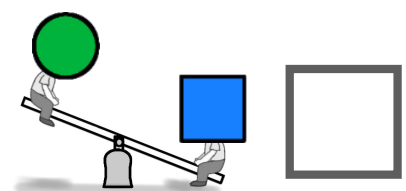
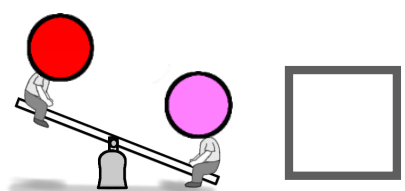



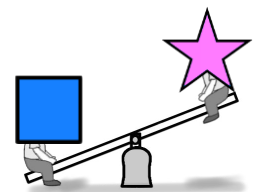


rainbow

rainbow

1番重いのは誰ですか。右の箱の中のお顔に○をつけましょう。1番軽いのは誰ですか。右の箱の中のお顔に△をつけましょう。



rainbow



rainbow

rainbow

点線の上のシーソーを見て点線の下2つのシーソーで正しいのはどれですか四角の箱の中に○をかきましょう。



分野別毎日プリントPart2 重さ比べ1

1. 重さの比べ方で、右の皿の中のものを選びましょう。

分野別毎日プリントPart2 重さ比べ1

1. 重さの比べ方で、右の皿の中のものを選びましょう。

分野別毎日プリントPart2 重さ比べ1

1. 重さの比べ方で、右の皿の中のものを選びましょう。

分野別毎日プリントPart2 重さ比べ1

1. 重さの比べ方で、右の皿の中のものを選びましょう。

分野別毎日プリントPart2 重さ比べ1

1. 重さの比べ方で、右の皿の中のものを選びましょう。

分野別毎日プリントPart2 重さ比べ1

1. 重さの比べ方で、右の皿の中のものを選びましょう。

分野別毎日プリントPart2 重さ比べ1

2. 重さの比べ方で、右の皿の中のものを選びましょう。

分野別毎日プリントPart2 重さ比べ1

1. 重さの比べ方で、右の皿の中のものを選びましょう。

分野別毎日プリントPart2 重さ比べ1

1. 重さの比べ方で、右の皿の中のものを選びましょう。



Initial weighing scale problems:

- Scale 1: 2 red stars vs 1 red star and 1 blue square
- Scale 2: 1 pink circle vs 3 yellow flowers
- Scale 3: 2 blue squares and 1 pink circle vs 2 pink circles
- Scale 4: 1 red star vs ?

Answer box:

整理しよう

Simplified weighing scale problems (with crossed-out items):

- Scale 1: ~~2 red stars~~ vs ~~1 red star and 1 blue square~~
- Scale 2: 1 pink circle vs 3 yellow flowers
- Scale 3: ~~2 blue squares and 1 pink circle~~ vs ~~2 pink circles~~
- Scale 4: 1 red star vs ?

Answer box:

こうなります

おきかえると

Swapped weighing scale problems (objects swapped between scales):

- Scale 1: 1 red star vs 1 blue square
- Scale 2: 1 pink circle vs 3 yellow flowers
- Scale 3: 1 blue square vs 1 pink circle
- Scale 4: 1 red star vs ?

Answer box:

Final simplified weighing scale problems:

- Scale 1: 1 red star vs 1 blue square
- Scale 2: 1 pink circle vs 3 yellow flowers
- Scale 3: 1 blue square vs 1 pink circle
- Scale 4: 1 red star vs ?

Answer box: