

やり込んだお子さんのための

分野別毎日プリント

Part 2

べんきょうは
 まいにちコツコツ
 あせらずコツコツ
 ふくしゅうコツコツ
 コツコツ
 コツコツ
 コツコツヤレバ
 ダイジョウブ


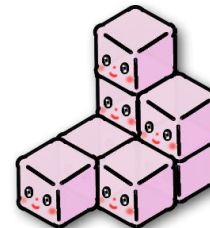
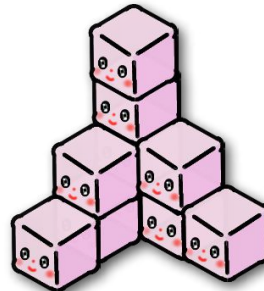



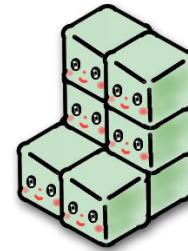


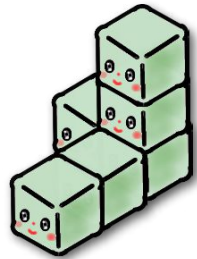


なまえ

数量2

--	--	--	--	--	--	--	--	--	--	--	--	--	--	--	--	--	--	--	--	--

rainbow

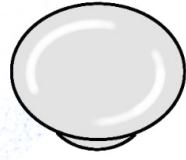
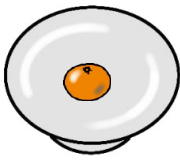

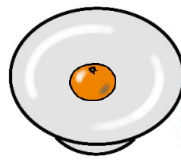




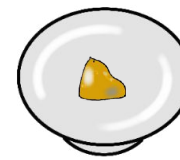
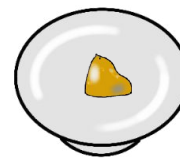
rainbow

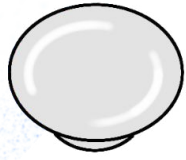


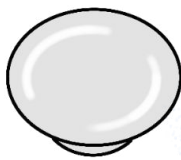
積木の数が同じものを探して線でむすびましょう。

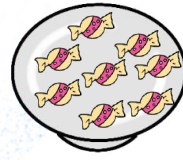
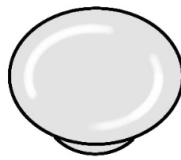
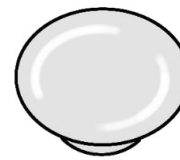
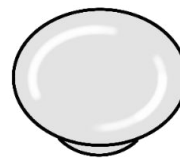
rainbow


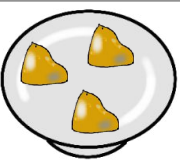


rainbow

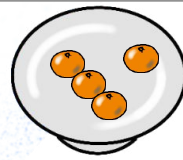
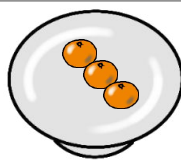
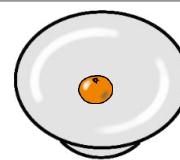
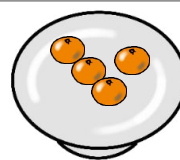
			
<input type="text"/>	<input type="text"/>	<input type="text"/>	<input type="text"/>

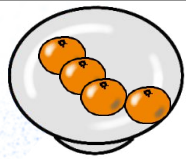
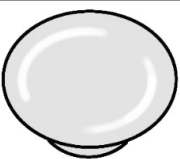

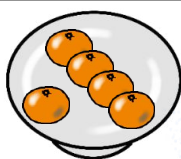
			
<input type="text"/>	<input type="text"/>	<input type="text"/>	<input type="text"/>

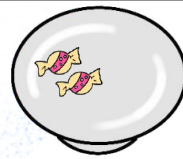
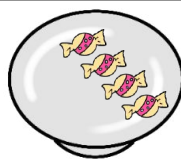
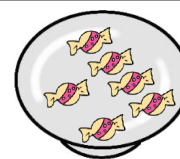

			
<input type="text"/>	<input type="text"/>	<input type="text"/>	<input type="text"/>





			
<input type="text"/>	<input type="text"/>	<input type="text"/>	<input type="text"/>

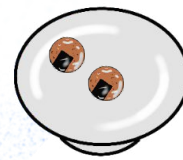



			
<input type="text"/>	<input type="text"/>	<input type="text"/>	<input type="text"/>

			
<input type="text"/>	<input type="text"/>	<input type="text"/>	<input type="text"/>

			
<input type="text"/>	<input type="text"/>	<input type="text"/>	<input type="text"/>

			
<input type="text"/>	<input type="text"/>	<input type="text"/>	<input type="text"/>

			
<input type="text"/>	<input type="text"/>	<input type="text"/>	<input type="text"/>

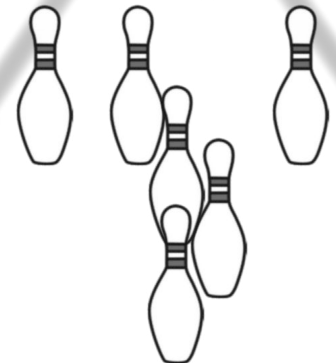
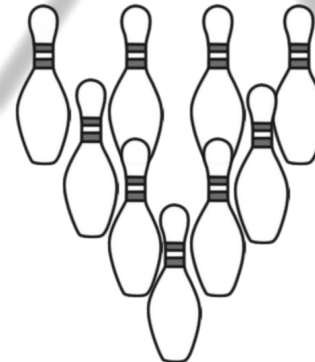

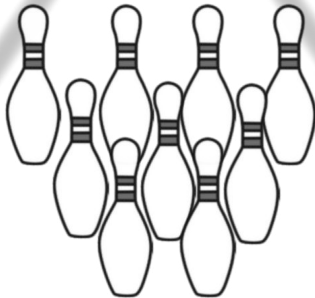

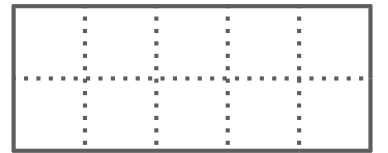
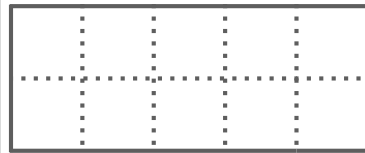
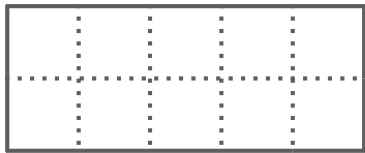
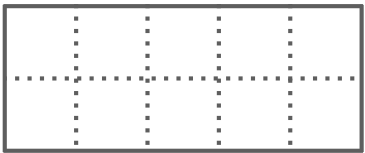
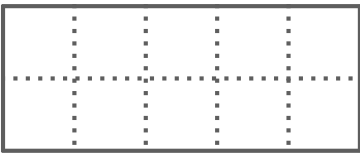
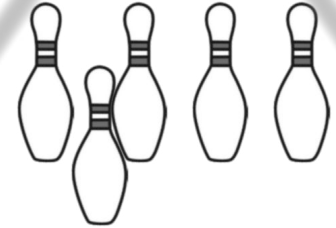


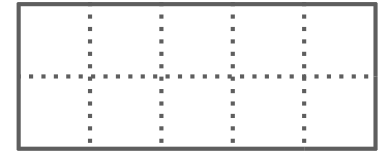
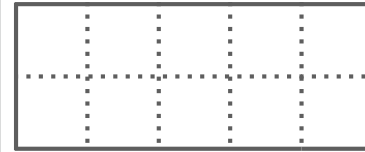
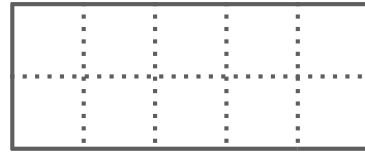
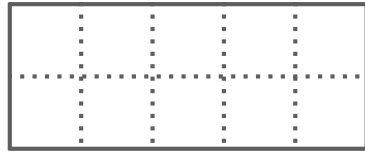
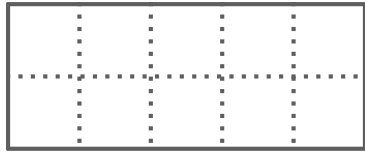
			
<input type="text"/>	<input type="text"/>	<input type="text"/>	<input type="text"/>

rainbow

rainbow

4枚のお皿に仲良く同じ数になるように分けると1皿何個になりますか。その数だけ下の箱に○をかきましょう。

rainbow

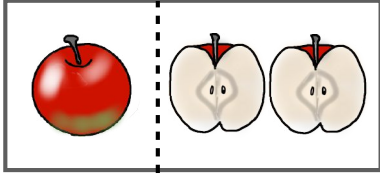


rainbow



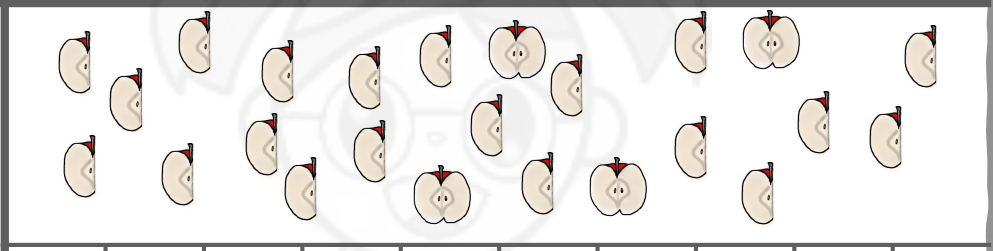
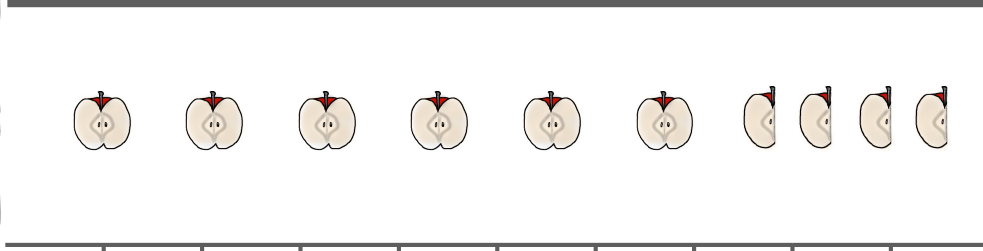
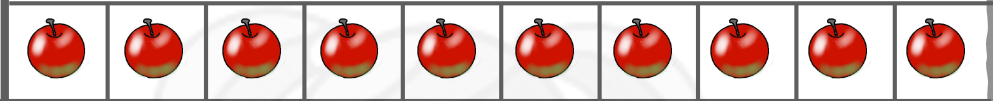
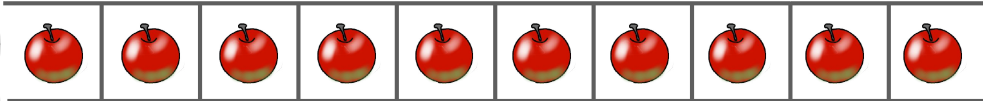
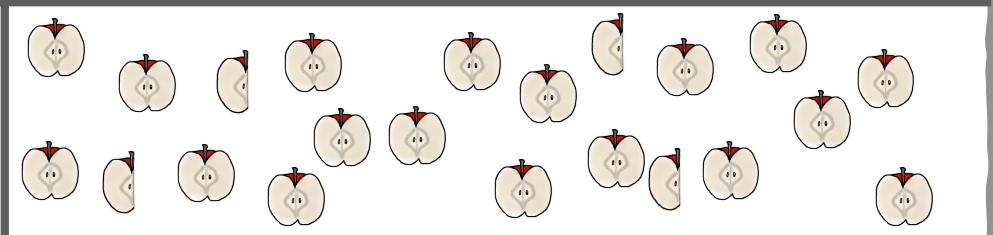
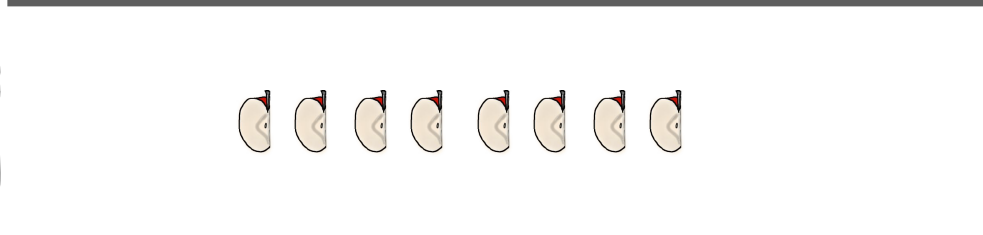

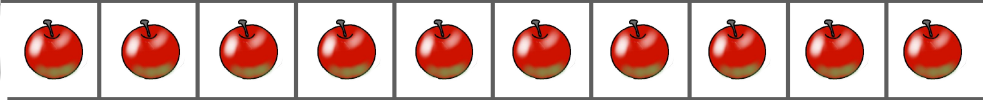
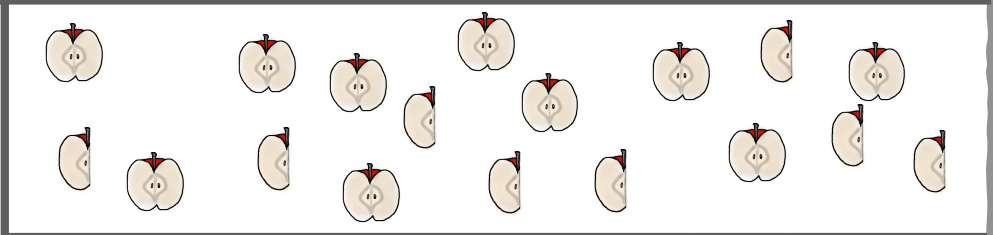
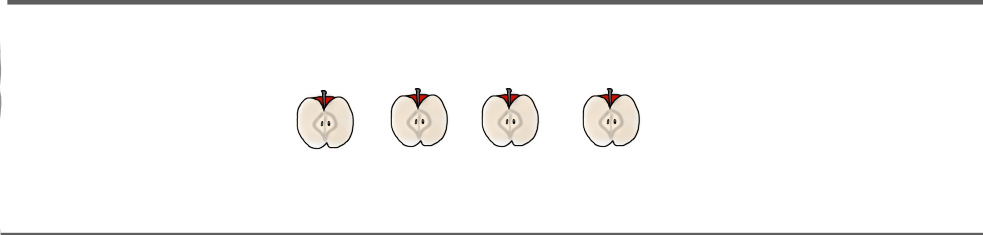
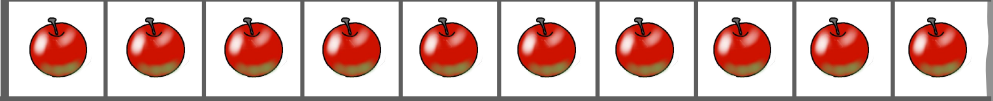
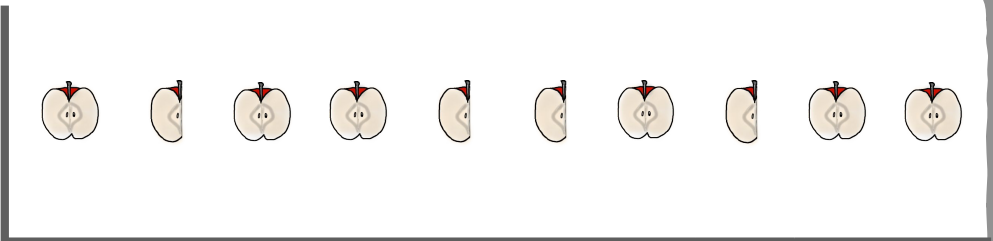
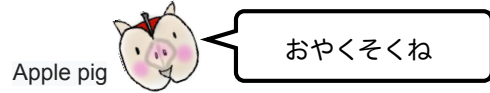
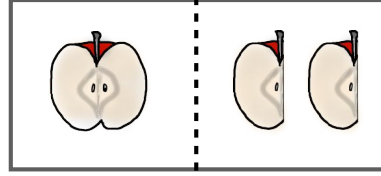
rainbow

倒れたピンはかいていませんが、ピンは何本倒れたでしょうか。その数だけ上のマス目に○をかきましょう。(ヒント ボーリングのピンの数は10本)

ひだりと みぎは おなじ







ひだりと みぎは おなじ




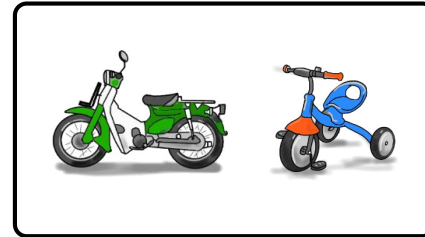

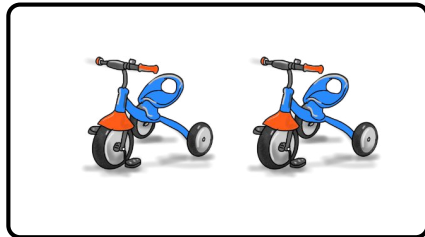
お約束を考えると、それぞれの切ったリンゴは、切っていないリンゴ何個分になりますか。その数だけリンゴに○をつけましょう。

rainbow







--	--	--	--	--	--	--	--	--	--

--	--	--	--	--	--	--	--	--	--



--	--	--	--	--	--	--	--	--	--

--	--	--	--	--	--	--	--	--	--



--	--	--	--	--	--	--	--	--	--


--	--	--	--	--	--	--	--	--	--


rainbow

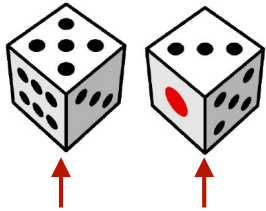
rainbow

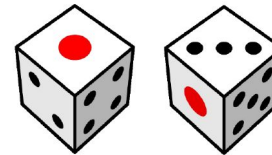
右の乗り物と左の乗り物のタイヤの数はいくつ違いますか。その数だけ下の箱に○をかきましょう。

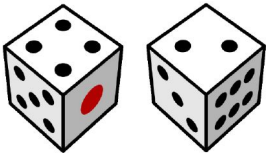
rainbow


 サイコロは はんたいがわの めんの かずを
あわせると「7」になっています



















rainbow


rainbow


1番上の面の反対側の面（底の面）の数を合わせるといくつになりますか。その数だけマス目に○をかきましょう。


rainbow







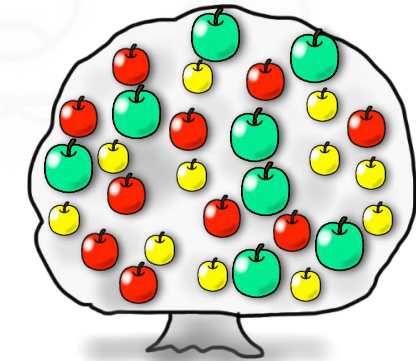










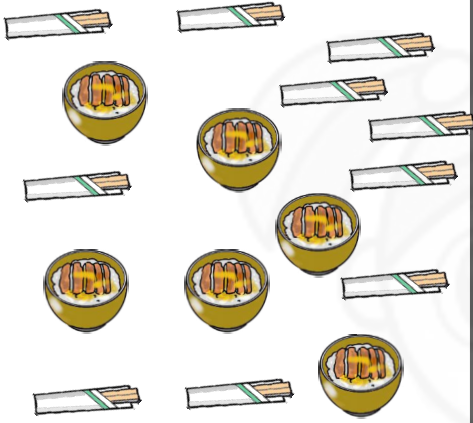


rainbow


rainbow


三色の果物が実る木です。2番目たくさん実った絵を見つけ上の絵に○をつけましょう。そしてその数を下のマス目に○をかきましょう。

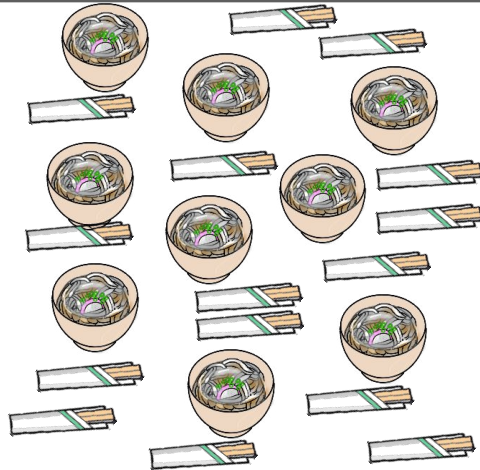
rainbow

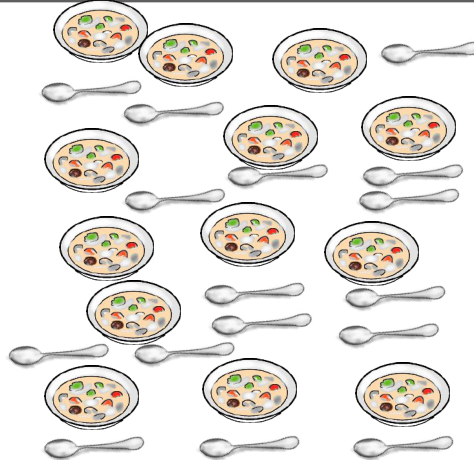


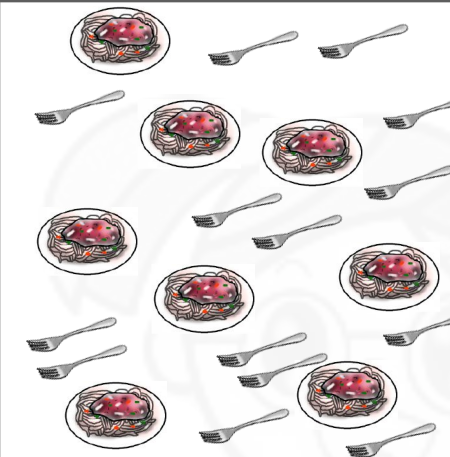


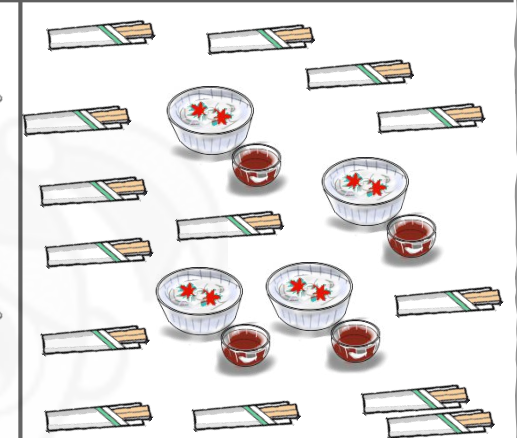












rainbow

お箸やスプーンなど道具はいくつありますか。その数だけ下の箱に○をかきましょう。

rainbow

分野別毎日プリントPart2 数量2 3 レインボー先生

基本の数を同じものをあわせてみましょう。

分野別毎日プリントPart2 数量2 3 レインボー先生

それぞれの数を数べてその数だけ○に○をかきましょう。

分野別毎日プリントPart2 数量2 5 レインボー先生

4枚の皿に食べ残しになるように残りを残さず、その数だけ○に○をかきましょう。

分野別毎日プリントPart2 数量2 5 レインボー先生

ボールは5はあいていますが、ピンは全部倒れてしまったら、その数だけ○に○をかきましょう。(ピン・ボールがピンを倒した10個)

分野別毎日プリントPart2 数量2 7 レインボー先生

お数を数え、それぞれのおやつは、切っていないリンゴの数だけ○に○をかきましょう。

分野別毎日プリントPart2 数量2 8 レインボー先生

お車の物と車の乗り物タイプの数だけ○に○をかきましょう。

分野別毎日プリントPart2 数量2 9 レインボー先生

サイコロは ほんたいがの あんの かずを あわせると「9」になっています

9以上の数のサイコロ(個の数)の数をあわせて○に○をかきましょう。

分野別毎日プリントPart2 数量2 10 レインボー先生

お数の数を数え、2番目と3番目の数をあわせて○に○をかきましょう。そしてその数を下のマス目に○をかきましょう。

分野別毎日プリントPart2 数量2 11 レインボー先生

お皿やパンなど数が多いので、お数を数えて○に○をかきましょう。